

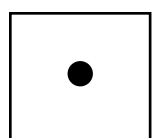

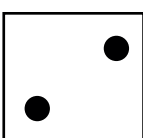



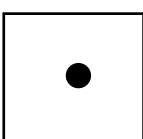


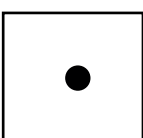
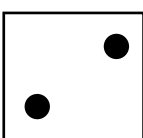


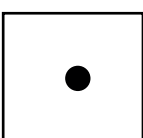
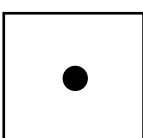



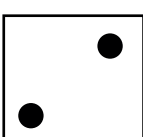



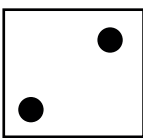

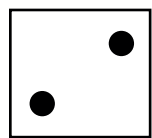

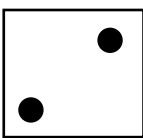



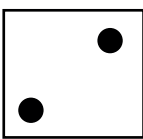

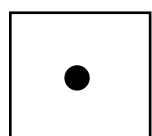

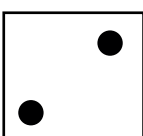
# La suma

**Objetivo:** Lograr el dominio de la suma.

## Indicaciones

- Repaso los pasos para la suma.
- Desarrollo los ejercicios.
- Socializo los resultados con el resto del grupo formando una ronda.
- Resuelvo dudas si las tengo.

- Resuelvo las sumas contando los puntos de cada ficha.

	+		+		=	
	+		+		=	
	+		+		=	
	+		+		=	
	+		+		=	
	+		+		=	
	+		+		=	
	+		+		=	
	+		+		=	